



UNIVERSITY OF CAMBRIDGE INTERNATIONAL EXAMINATIONS
General Certificate of Education Advanced Subsidiary Level and Advanced Level

GEOGRAPHY

9696/11

Paper 1 Core Geography

May/June 2011

INSERT

3 hours

READ THESE INSTRUCTIONS FIRST

This Insert contains all the Figures and the Photograph referred to in the questions.

This document consists of **6** printed pages and **2** blank pages.



Photograph A for Question 1

A meander on the River Swale in North Yorkshire, UK



Fig. 1 for Question 2

Average urban climatic conditions compared with surrounding rural areas

Radiation: Sunshine Duration:	5% to 15% less in urban areas
Temperature: Winter minimum (average)	1 to 2°CX..... in urban areas
Wind Speed: Annual Mean	20% to 30% less in urban areas
Fog: Winter	100%Y..... in urban areas
Precipitation: Total	5% to 10% more in urban areas

Fig. 2 for Question 3

A landslide

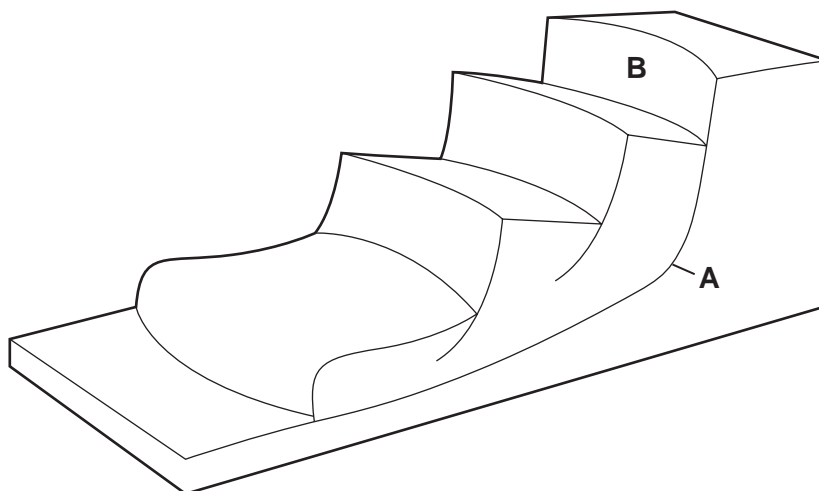
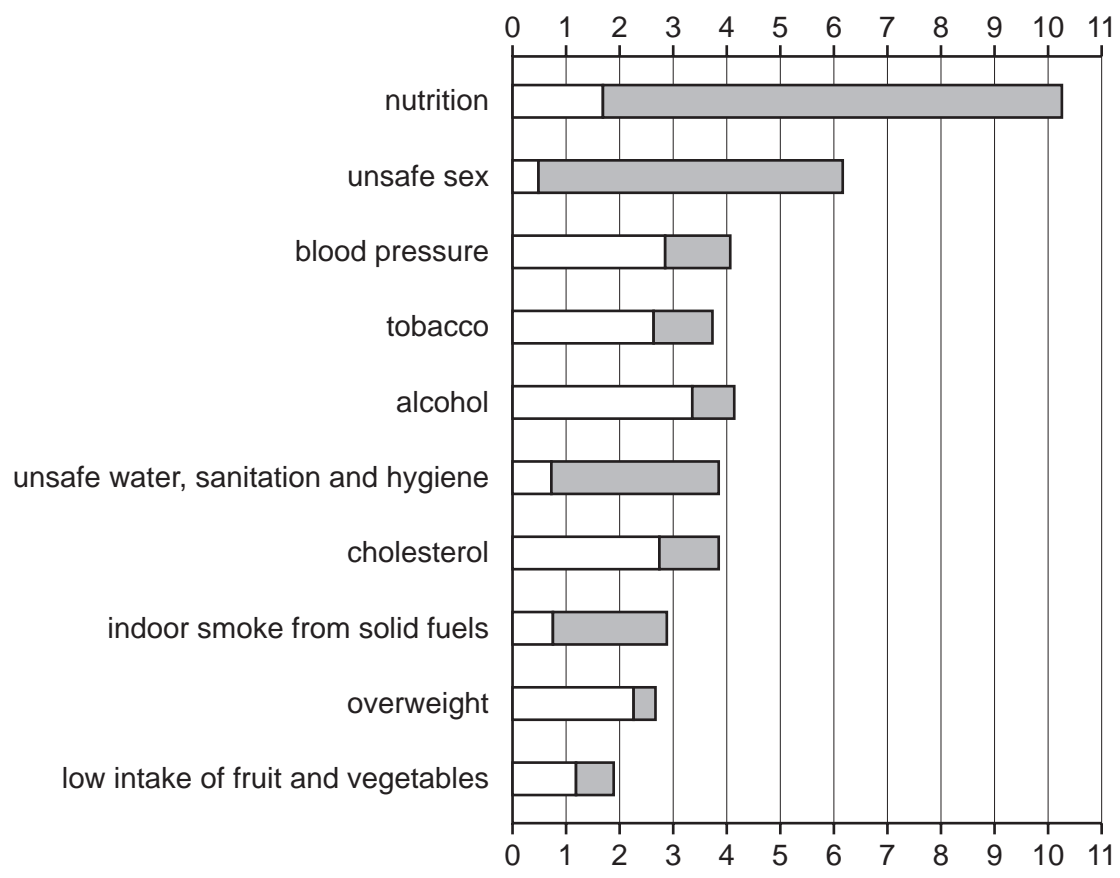


Fig. 3 for Question 4

Top 10 risk factors to health for MEDCs and LEDCs in 2002



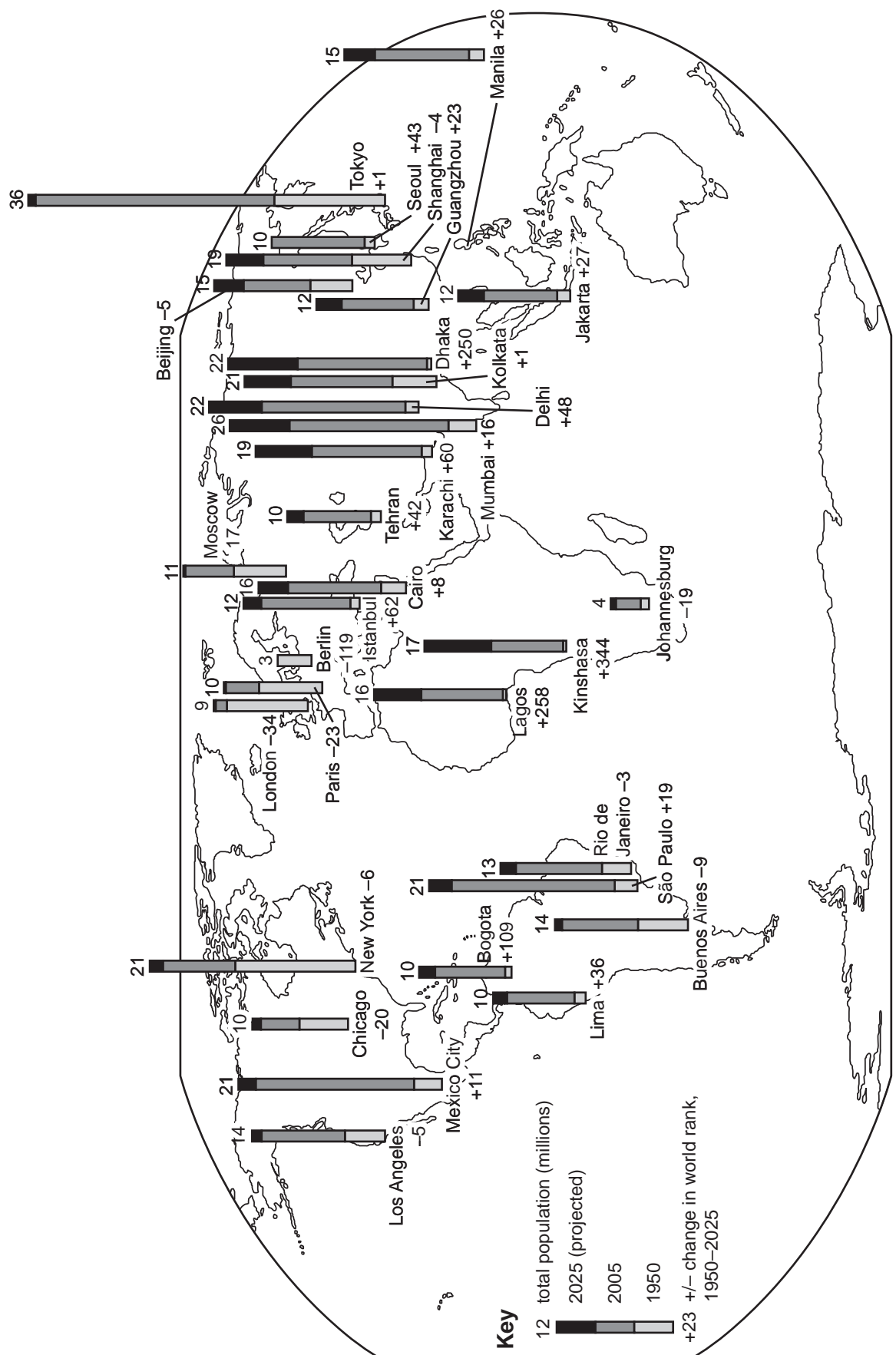
Key

- MEDCs
- LEDCs

percentage of years of life lost

Fig. 5 for Question 6

Population of selected cities in 1950 and 2005 and projected for 2025



BLANK PAGE

BLANK PAGE

Permission to reproduce items where third-party owned material protected by copyright is included has been sought and cleared where possible. Every reasonable effort has been made by the publisher (UCLES) to trace copyright holders, but if any items requiring clearance have unwittingly been included, the publisher will be pleased to make amends at the earliest possible opportunity.

University of Cambridge International Examinations is part of the Cambridge Assessment Group. Cambridge Assessment is the brand name of University of Cambridge Local Examinations Syndicate (UCLES), which is itself a department of the University of Cambridge.